

# Maths Puzzler!

October 2018



## Monthly Maths Stars!

Y1- Toby D'Souza - for always applying lots of effort and enthusiasm in maths!

Y2- Izzy Usherwood - fantastic problem solving and seeing patterns in numbers.



Razza and Gina have the same number of stickers.



- Razza gives 15 stickers away.
- Gina gives 32 stickers away.

How many more stickers than Gina does Razza have now?

Here is a number sentence.

$$5 \times \square > 32$$

What is the smallest whole number that can be used to make the sentence correct?


## Autumnal Maths Fun!

Why not make some weighing scales with a coat hanger and baskets!

Can you find the heaviest conker?

Which is lighter, an apple or a conker?

Mo buys a key ring.



His mum gives him a quarter of the money.

How much money does he have to pay himself?




### Weekend maths fun ideas ...

Ordering objects by size!




### Practical maths ...

Fraction Fun!



Tom is chatting with his mum about birthdays.

They take Tom's age and double it. Then they add 5. The answer is 35. Mum says this is her age. How old is Tom?



The toy shop stocks tricycles and go-carts. The tricycles have 3 wheels. The go-carts have 5 wheels.

Bobby counted the wheels. He counted 37 altogether.

How many tricycles are there?

How many go-carts?

### Bonkers Conkers!

Practical number bond tasks for weekend challenges.

